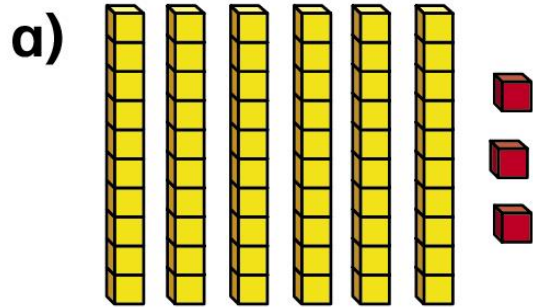
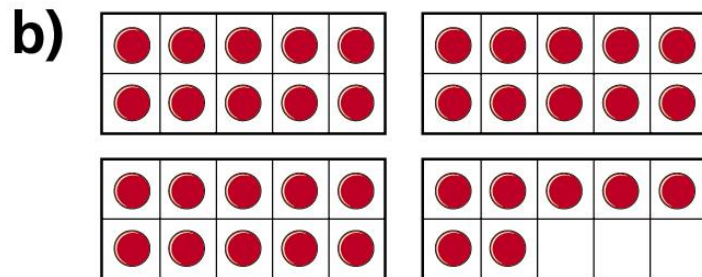


# One more one less


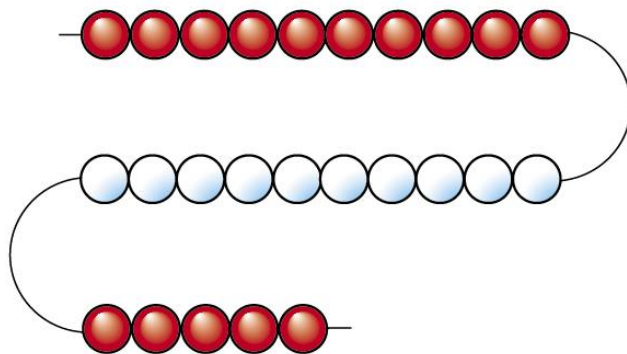
**I** What is one more than each number?





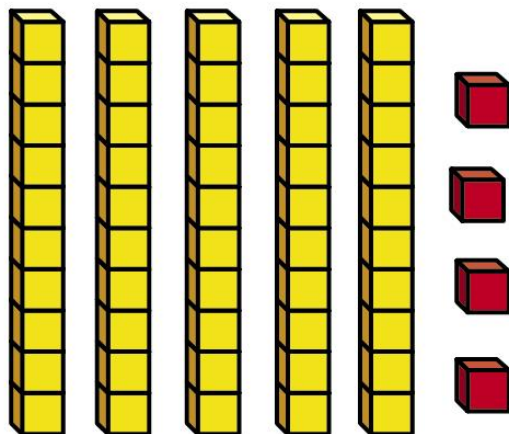


I c)





2 Sam makes this number.



a) Make a number that is one less than Sam's.

b) What number did you make?



3 Kim has 73 stickers.

She gets one more sticker.

How many stickers does she have now?



**4** Write one more than each number.

a) 48

b) 73

c) 59

d) 9

e) 36

f) 99



**5** Write one less than each number.

**a)** 61

**b)** 83

**c)** 90

**d)** 10

**e)** 78

**f)** 29



**6** Complete the sentences.

a) One less than 39 is

b) One more than 39 is

c) One more than  is 39

d) One less than  is 39