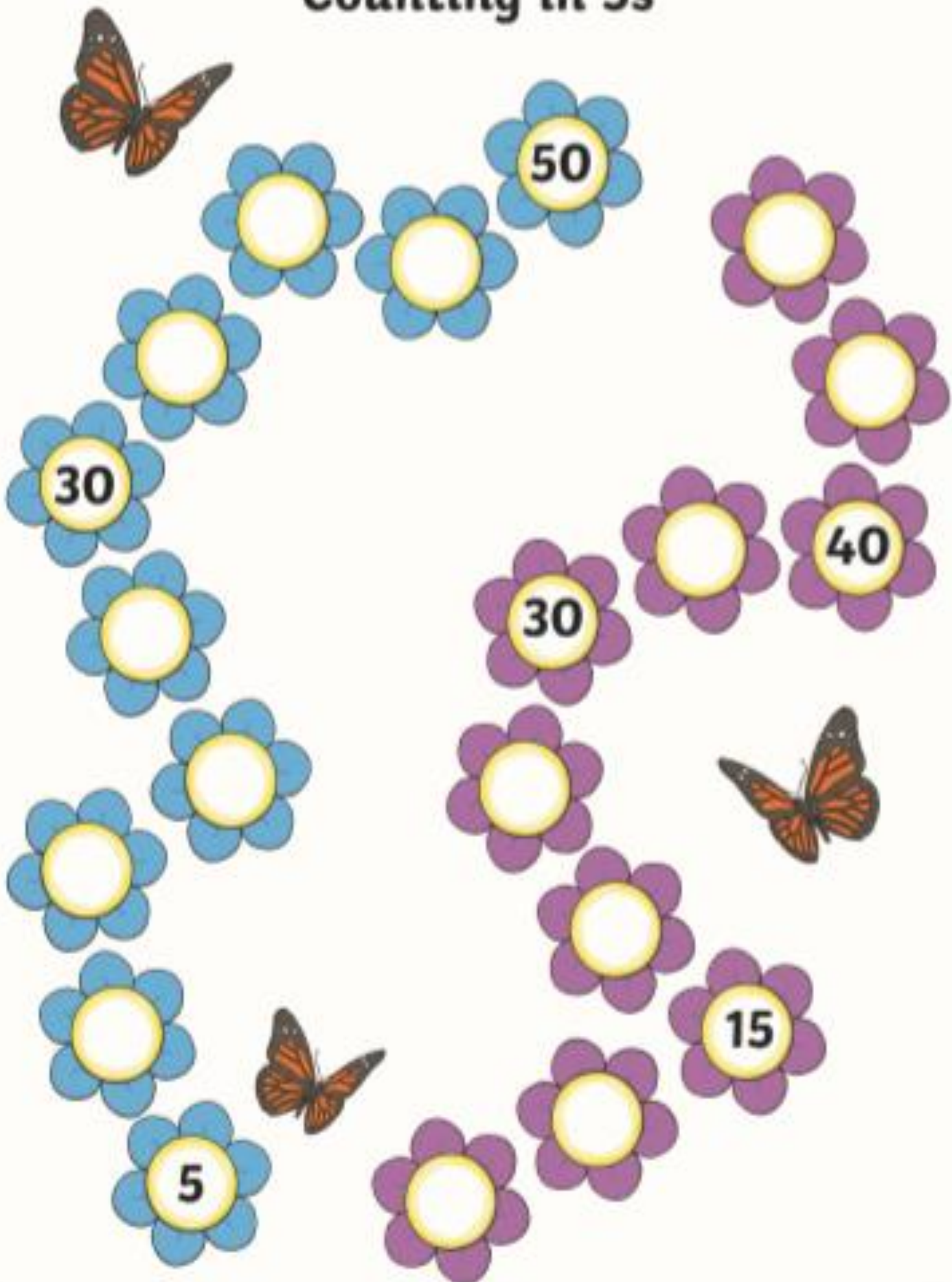


# Spring Missing Numbers

## Counting in 5s



A worksheet for practicing counting in 5s. It features two paths of flowers: a blue path on the left and a purple path on the right. Each path has 10 flowers in total. The numbers 5, 15, 30, 40, and 50 are placed in the centers of specific flowers. The remaining flowers have empty yellow centers for students to write the missing numbers. Three monarch butterflies are scattered around the paths.

**Blue Path (Left):**

- Flower 1 (bottom): 5
- Flower 2: [ ]
- Flower 3: [ ]
- Flower 4: [ ]
- Flower 5: 30
- Flower 6: [ ]
- Flower 7: [ ]
- Flower 8: [ ]
- Flower 9: [ ]
- Flower 10 (top): [ ]

**Purple Path (Right):**

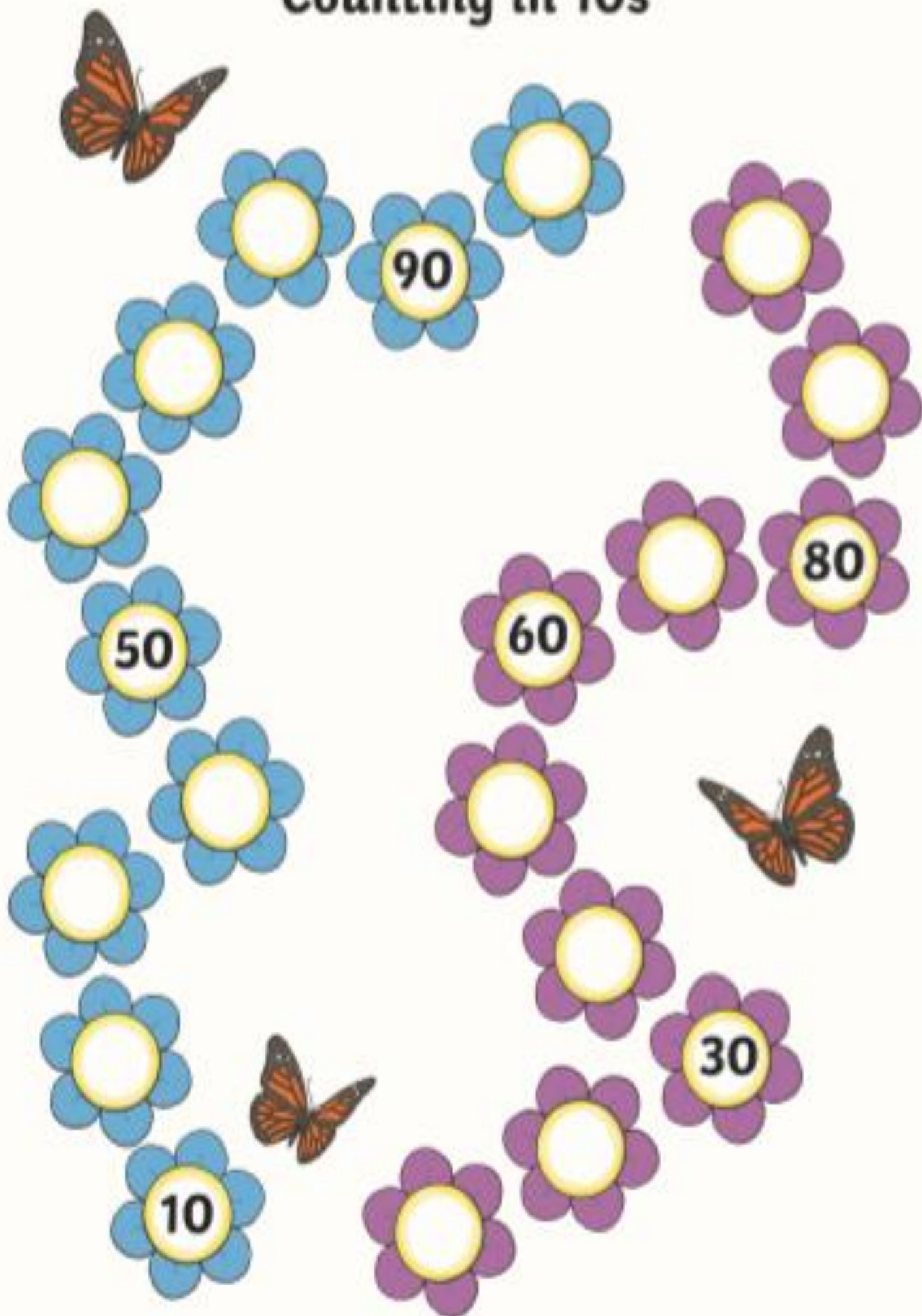
- Flower 1 (bottom): [ ]
- Flower 2: [ ]
- Flower 3: [ ]
- Flower 4: 15
- Flower 5: [ ]
- Flower 6: [ ]
- Flower 7: 30
- Flower 8: [ ]
- Flower 9: [ ]
- Flower 10 (top): 40

**Top Row:**

- Flower 1 (left): [ ]
- Flower 2 (right): 50

# Spring Missing Numbers

## Counting in 10s



A spring-themed activity for counting in 10s. The page features two paths of flowers: a blue path on the left and a purple path on the right. Three monarch butterflies are scattered around the paths. The numbers 10, 30, 50, 60, 80, and 90 are placed in the centers of some flowers, while others are blank for the student to fill in.

**Blue Path (Left):**

- 10
- Blank
- Blank
- 50
- Blank
- Blank
- Blank
- Blank
- Blank
- Blank

**Purple Path (Right):**

- Blank
- Blank
- Blank
- Blank
- 60
- Blank
- Blank
- 80
- Blank
- Blank
- Blank
- 30
- Blank

**Other Numbers:**

- 90 (in a blue flower)

# Spring Missing Numbers

## Counting in 2s




The image shows a large number 10 shape composed of flowers. The left vertical stem and the top curve are made of blue flowers, while the right vertical stem and the bottom curve are made of purple flowers. The numbers are placed in the following positions:

- Blue flower at the bottom left: 2
- Blue flower on the left side: 10
- Blue flower at the top left: 18
- Purple flower on the right side: 6
- Purple flower on the right side: 12
- Purple flower on the right side: 16

There are three monarch butterflies: one at the top left, one at the bottom right, and one at the bottom left.

There are 10 sweets in a bag.



How many sweets in 2 bags?

How many sweets in 3 bags?

How many sweets in 5 bags?


How many sweets in 8 bags?

How many sweets in 10 bags?

How many sweets in \_\_\_ bags?

There are 5 crayons in a box.

How many crayons in 2 boxes?



How many crayons in 4 boxes?

How many crayons in 5 boxes?

How many crayons in 7 boxes?

How many crayons in 10 boxes?

How many crayons in \_\_\_ boxes?

There are 2 flowers in a pot.

How many flowers in 2 pots?



How many flowers in 3 pots?

How many flowers in 5 pots?

How many flowers in 6 pots?

How many flowers in 10 pots?

How many flowers in \_\_\_ pots?