

LO: making equal groups.

What does equal mean?

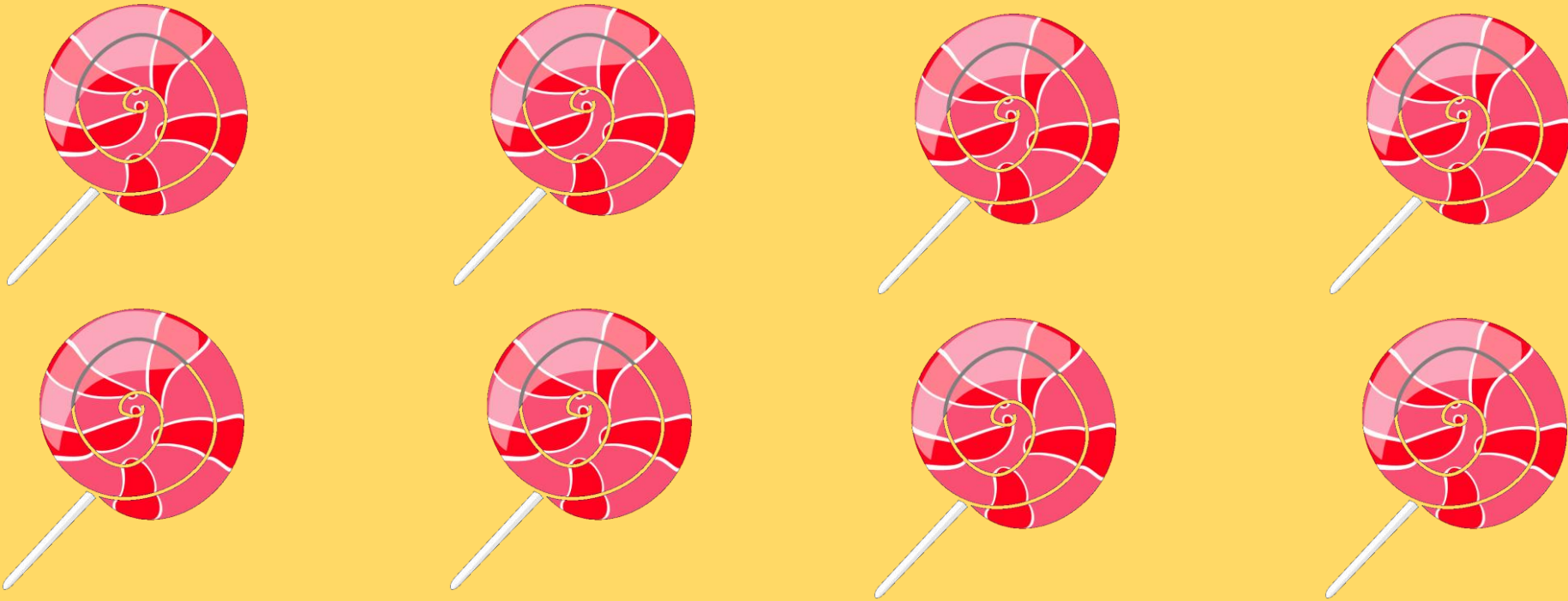
When you are multiplying, it is about making equal groups.



How many in a group?

How many groups?

___ groups of ___.




How many in a group?

How many groups?

___ groups of ___.

How many equal groups of 2 can you make with the mittens?



There are ____ groups of 2 mitten
If you had 10 mittens, how many
equal groups of 2 mittens could
you make?


Look at the different images.

What's the same? What's different?

a.



b.



c.



Zeb and Paulo each have the same amount of sweets.

They each have less than 20 sweets.

Zeb has 5 equal groups of sweets.
Paulo has grouped his sweets in tens.

How many sweets do they each have?

